



# Cambridge International AS & A Level

CANDIDATE NAME



CENTRE NUMBER

--	--	--	--	--

CANDIDATE NUMBER

--	--	--	--



## PHYSICS

9702/43

Paper 4 A Level Structured Questions

October/November 2024

2 hours

You must answer on the question paper.

No additional materials are needed.

### INSTRUCTIONS

- Answer **all** questions.
- Use a black or dark blue pen. You may use an HB pencil for any diagrams or graphs.
- Write your name, centre number and candidate number in the boxes at the top of the page.
- Write your answer to each question in the space provided.
- Do **not** use an erasable pen or correction fluid.
- Do **not** write on any bar codes.
- You may use a calculator.
- You should show all your working and use appropriate units.

### INFORMATION

- The total mark for this paper is 100.
- The number of marks for each question or part question is shown in brackets [ ].

This document has **24** pages. Any blank pages are indicated.



**Data**

acceleration of free fall	$g = 9.81 \text{ m s}^{-2}$
speed of light in free space	$c = 3.00 \times 10^8 \text{ m s}^{-1}$
elementary charge	$e = 1.60 \times 10^{-19} \text{ C}$
unified atomic mass unit	$1 \text{ u} = 1.66 \times 10^{-27} \text{ kg}$
rest mass of proton	$m_p = 1.67 \times 10^{-27} \text{ kg}$
rest mass of electron	$m_e = 9.11 \times 10^{-31} \text{ kg}$
Avogadro constant	$N_A = 6.02 \times 10^{23} \text{ mol}^{-1}$
molar gas constant	$R = 8.31 \text{ J K}^{-1} \text{ mol}^{-1}$
Boltzmann constant	$k = 1.38 \times 10^{-23} \text{ J K}^{-1}$
gravitational constant	$G = 6.67 \times 10^{-11} \text{ N m}^2 \text{ kg}^{-2}$
permittivity of free space	$\epsilon_0 = 8.85 \times 10^{-12} \text{ F m}^{-1}$ $(\frac{1}{4\pi\epsilon_0} = 8.99 \times 10^9 \text{ m F}^{-1})$
Planck constant	$h = 6.63 \times 10^{-34} \text{ J s}$
Stefan–Boltzmann constant	$\sigma = 5.67 \times 10^{-8} \text{ W m}^{-2} \text{ K}^{-4}$

**Formulae**

uniformly accelerated motion	$s = ut + \frac{1}{2}at^2$ $v^2 = u^2 + 2as$
hydrostatic pressure	$\Delta p = \rho g \Delta h$
upthrust	$F = \rho g V$
Doppler effect for sound waves	$f_o = \frac{f_s v}{v \pm v_s}$
electric current	$I = Anvq$
resistors in series	$R = R_1 + R_2 + \dots$
resistors in parallel	$\frac{1}{R} = \frac{1}{R_1} + \frac{1}{R_2} + \dots$





gravitational potential

$$\phi = -\frac{GM}{r}$$

gravitational potential energy

$$E_P = -\frac{GMm}{r}$$

pressure of an ideal gas

$$p = \frac{1}{3} \frac{Nm}{V} \langle c^2 \rangle$$

simple harmonic motion

$$a = -\omega^2 x$$

velocity of particle in s.h.m.

$$v = v_0 \cos \omega t$$

$$v = \pm \omega \sqrt{(x_0^2 - x^2)}$$

electric potential

$$V = \frac{Q}{4\pi\epsilon_0 r}$$

electrical potential energy

$$E_P = \frac{Qq}{4\pi\epsilon_0 r}$$

capacitors in series

$$\frac{1}{C} = \frac{1}{C_1} + \frac{1}{C_2} + \dots$$

capacitors in parallel

$$C = C_1 + C_2 + \dots$$

discharge of a capacitor

$$x = x_0 e^{-\frac{t}{RC}}$$

Hall voltage

$$V_H = \frac{BI}{ntq}$$

alternating current/voltage

$$x = x_0 \sin \omega t$$

radioactive decay

$$x = x_0 e^{-\lambda t}$$

decay constant

$$\lambda = \frac{0.693}{t_{\frac{1}{2}}}$$

intensity reflection coefficient

$$\frac{I_R}{I_0} = \frac{(Z_1 - Z_2)^2}{(Z_1 + Z_2)^2}$$

Stefan–Boltzmann law

$$L = 4\pi\sigma r^2 T^4$$

Doppler redshift

$$\frac{\Delta\lambda}{\lambda} \approx \frac{\Delta f}{f} \approx \frac{v}{c}$$





1 (a) State Newton's law of gravitation.

.....

.....

..... [2]

(b) A planet may be considered as a uniform sphere.

A satellite is in circular orbit of period  $T$  around the planet at a height  $h$  above the surface. The height of the orbit can be adjusted by use of the satellite's rocket engines.

Fig. 1.1 shows the variation with  $h$  of  $T^{\frac{2}{3}}$ .

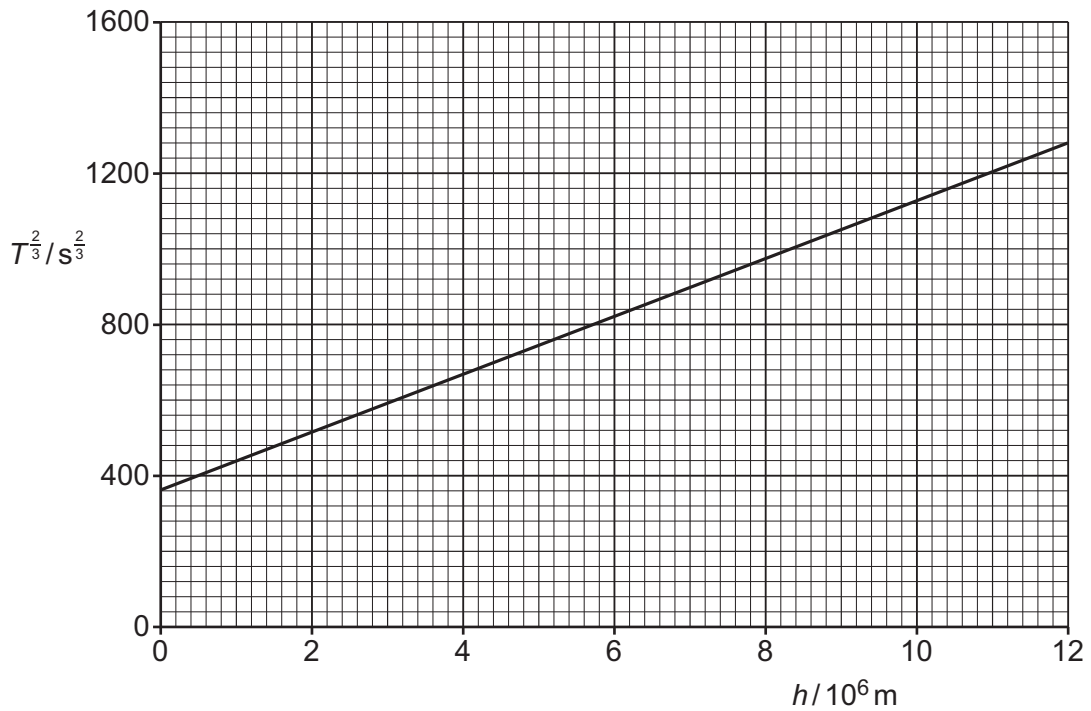


Fig. 1.1

(i) By reference to forces, explain why the orbit of the satellite is circular.

.....

.....

..... [2]





(ii) Use Newton's law of gravitation to show that  $h$  and  $T$  are related by

$$(h + B)^3 = \frac{GA}{4\pi^2} T^2$$

where  $G$  is the gravitational constant and  $A$  and  $B$  are constants that depend on the properties of the planet.

[3]

(iii) Use the gradient and intercept of the line in Fig. 1.1 to determine values for  $A$  and  $B$ . Give units with your answers.

$A = \dots\dots\dots$  unit  $\dots\dots\dots$

$B = \dots\dots\dots$  unit  $\dots\dots\dots$

[5]

[Total: 12]



DO NOT WRITE IN THIS MARGIN



2 (a) Define specific heat capacity.

.....  
.....  
..... [2]

(b) Two solid blocks X and Y are made from different metals. The blocks have different initial temperatures. Block Y is initially at room temperature.

The blocks are placed in direct thermal contact with each other at time  $t = 0$ . Fig. 2.1 shows the variation with  $t$  of the temperatures of the two blocks.

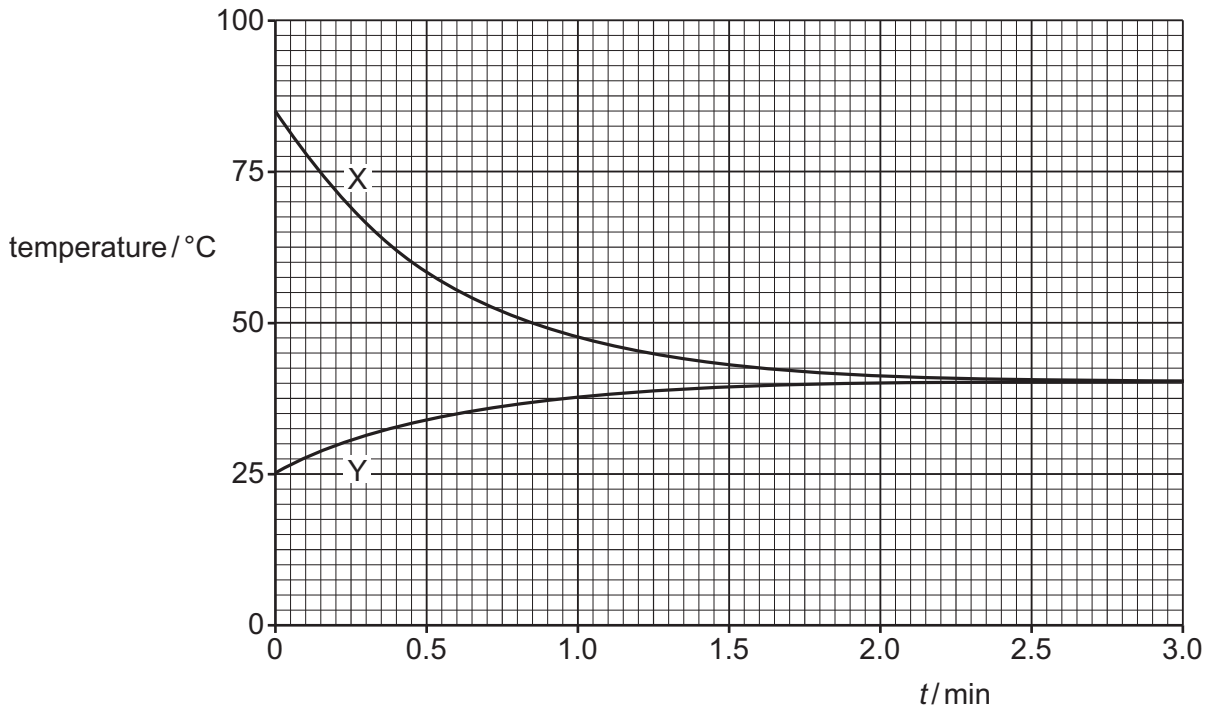


Fig. 2.1

DO NOT WRITE IN THIS MARGIN

DO NOT WRITE IN THIS MARGIN

DO NOT WRITE IN THIS MARGIN

DO NOT WRITE IN THIS MARGIN

DO NOT WRITE IN THIS MARGIN





(i) State **three** conclusions that may be drawn from Fig. 2.1. The conclusions may be qualitative or quantitative.

1 .....

.....

2 .....

.....

3 .....

.....

[3]

(ii) The ratio  $\frac{\text{mass of block Y}}{\text{mass of block X}}$  is equal to 1.3.

The metal in block Y has a specific heat capacity of  $901 \text{ J kg}^{-1} \text{ K}^{-1}$ .

Determine the specific heat capacity of the metal in block X.

specific heat capacity = .....  $\text{J kg}^{-1} \text{ K}^{-1}$  [3]

[Total: 8]

DO NOT WRITE IN THIS MARGIN





3 (a) (i) State what is meant by the Avogadro constant.

.....

.....

..... [1]

(ii) State the relationship between the Avogadro constant  $N_A$ , the molar gas constant  $R$  and the Boltzmann constant  $k$ .

[1]

(b) Two samples X and Y of ideal gases are both at thermodynamic temperature  $T$ .

Sample X has volume  $V$  and consists of  $N$  molecules, each of mass  $m$ .

Sample Y has volume  $2V$  and consists of  $2N$  molecules, each of mass  $2m$ .

(i) Complete Table 3.1 by giving expressions, in terms of some or all of  $N$ ,  $m$ ,  $T$ ,  $V$  and the constants in (a)(ii), for the quantities indicated.

Table 3.1

	sample X	sample Y
pressure		
amount of substance		
mean-square speed of molecules		
internal energy		

[4]







(ii) The temperature of sample X is now varied.

On Fig. 3.1, sketch the variation with thermodynamic temperature of the root-mean-square (r.m.s.) speed of the molecules of the gas.

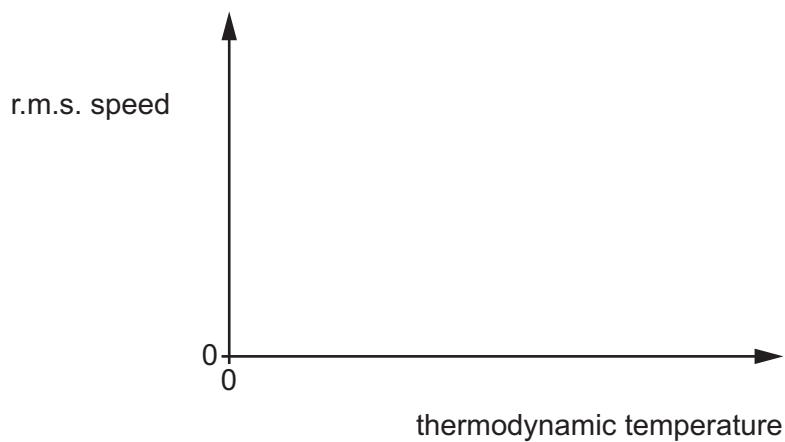


Fig. 3.1

[2]

[Total: 8]





4 (a) State what is meant by simple harmonic motion.

.....

.....

..... [2]

(b) A block is suspended from a spring, as shown in Fig. 4.1.

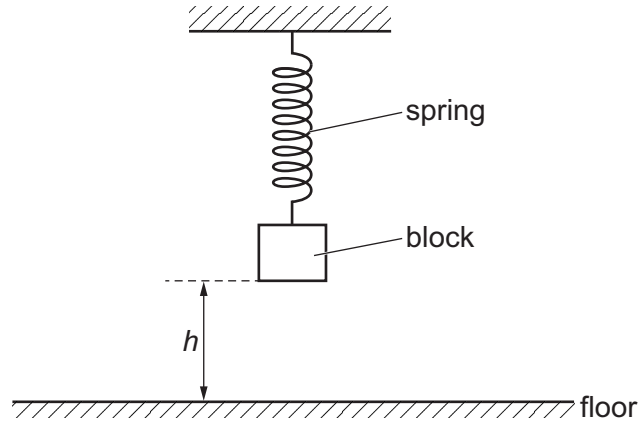


Fig. 4.1

The block is pulled down and released at time  $t = 0$ . It then oscillates vertically with simple harmonic motion.

Fig. 4.2 shows the variation of the velocity  $v$  of the block with height  $h$  of the base of the block above the floor.

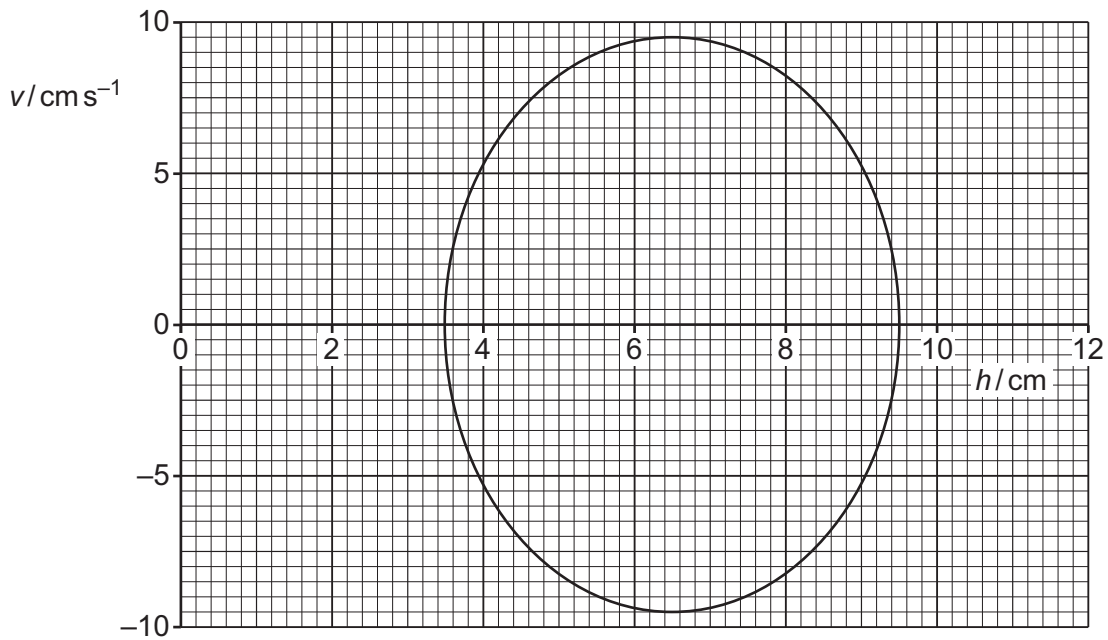


Fig. 4.2





(i) Determine the amplitude, in cm, of the oscillations.

amplitude = ..... cm [1]

(ii) Show that the angular frequency of the oscillations is  $3.2 \text{ rad s}^{-1}$ .

[2]

(iii) Calculate the period  $T$  of the oscillations.

$T = \dots\dots\dots$  s [2]

(iv) On Fig. 4.3, sketch the variation of  $h$  with time  $t$  from  $t = 0$  to  $t = 6.0$  s.

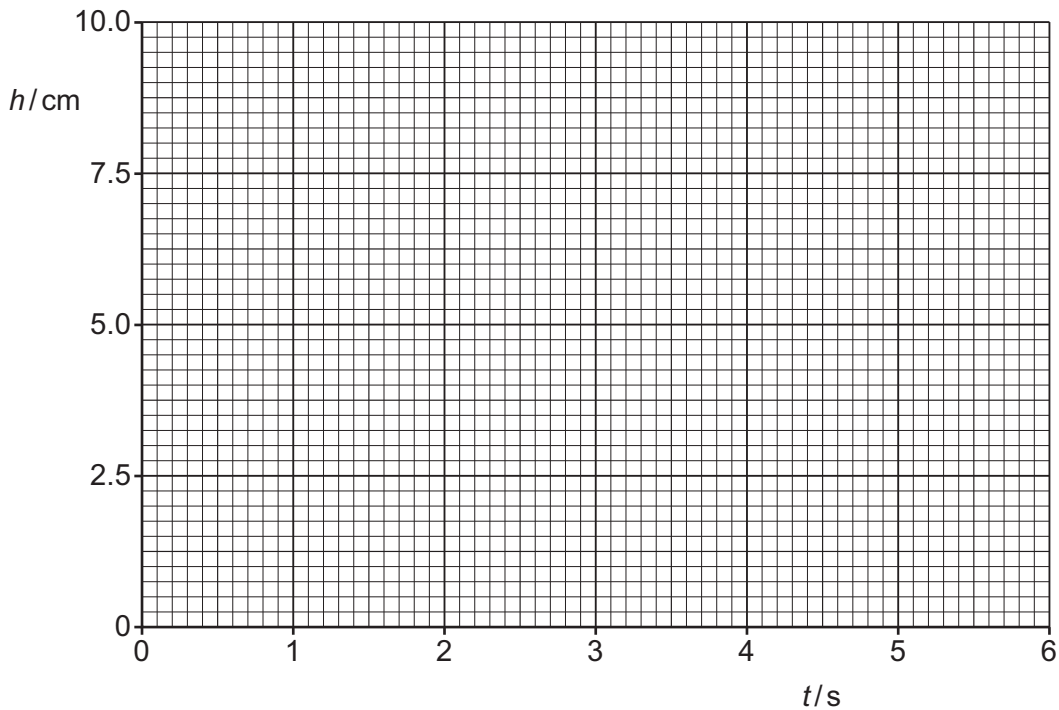


Fig. 4.3

[4]

[Total: 11]



DO NOT WRITE IN THIS MARGIN



5 (a) State the relationship between electric field and electric potential.

.....  
.....  
..... [2]

(b) Two charged isolated insulating spheres X and Y are near to each other, as shown in Fig. 5.1.



Fig. 5.1

P is a point on the line joining the centres of the spheres.

Explain why it is **not** possible for the total electric potential and the resultant electric field to simultaneously be zero at point P.

.....  
.....  
.....  
.....  
..... [3]

(c) The magnitudes of the charges on spheres X and Y in Fig. 5.1 are  $Q$  and  $2Q$  respectively. The spheres may be considered as point charges at their centres.

Point P is a distance  $x$  from the centre of sphere X.

The electric potential at point P is zero.

(i) Show that the distance  $y$  of point P from the centre of sphere Y is equal to  $2x$ .

[2]



DO NOT WRITE IN THIS MARGIN



- (ii) State an expression, in terms of  $Q$ ,  $x$  and the permittivity of free space  $\epsilon_0$ , for the electric field strength  $E_x$  at P due to sphere X.

$$E_x = \dots\dots\dots [1]$$

- (iii) Determine an expression, in terms of  $Q$ ,  $x$  and  $\epsilon_0$ , for the resultant electric field strength  $E$  at point P due to the two spheres.

$$E = \dots\dots\dots [2]$$

[Total: 10]

DO NOT WRITE IN THIS MARGIN





6 (a) (i) State what is meant by rectification of an alternating voltage.

.....  
..... [1]

(ii) State the difference between half-wave rectification and full-wave rectification.

.....  
..... [2]

(b) (i) Complete Fig. 6.1 to show a circuit that produces half-wave rectification of an alternating input voltage  $V_{IN}$  to produce output voltage  $V_{OUT}$  across the resistor R.

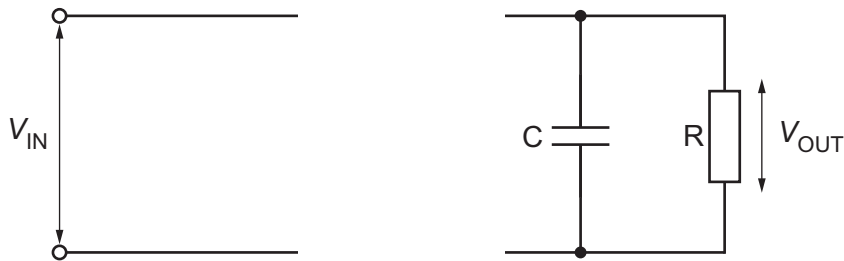


Fig. 6.1

[2]

(ii) State the purpose of the capacitor C in the circuit of Fig. 6.1.

.....  
..... [1]

(c) The input voltage  $V_{IN}$  in Fig. 6.1 is a square wave. Fig. 6.2 shows the variation of  $V_{IN}$  with time  $t$ .

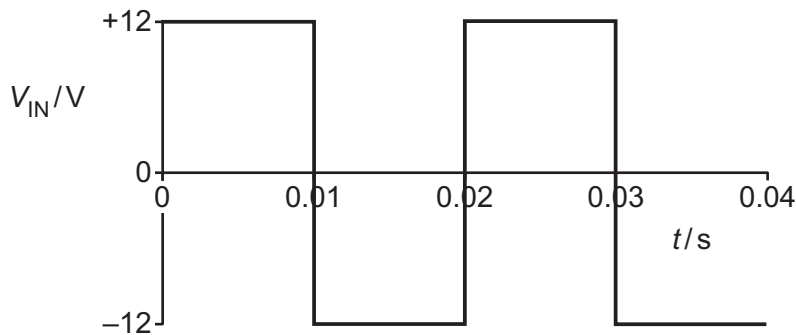


Fig. 6.2





Fig. 6.3 shows the variation of  $V_{OUT}$  with  $t$ .

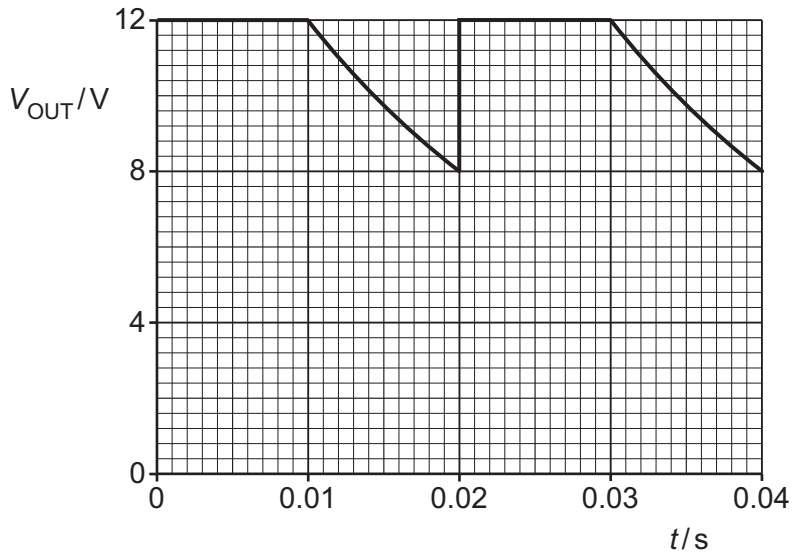


Fig. 6.3

The maximum energy stored in the capacitor is 0.041 J.

(i) Show that the capacitance of C is 570  $\mu\text{F}$ .

[2]

(ii) Determine the resistance of R.

resistance = .....  $\Omega$  [3]

[Total: 11]



DO NOT WRITE IN THIS MARGIN



7 (a) Define magnetic flux density.

.....

.....

..... [2]

(b) A long, straight wire carries a current into the page, as shown in Fig. 7.1.



Fig. 7.1

On Fig. 7.1, draw four field lines to represent the magnetic field around the wire due to the current in it. [3]

(c) Two identical wires X and Y are placed parallel to each other. The wires both carry current into the page, as shown in Fig. 7.2.

X



Y



Fig. 7.2







(i) Explain why the two wires exert a magnetic force on each other.

.....

.....

.....

..... [2]

(ii) On Fig. 7.2, draw an arrow to show the direction of the magnetic force exerted on wire X. Label your arrow F. [1]

(iii) The current in X is double the current in Y.

State how the magnetic force exerted on wire Y compares with the magnetic force exerted on wire X.

.....

.....

..... [2]

(iv) The direction of the current in both wires is now reversed.

State, with a reason, the effect of this change on the direction of the force on wire X.

.....

..... [1]

[Total: 11]

DO NOT WRITE IN THIS MARGIN





8 A polished sheet of magnesium in a vacuum emits electrons when it is illuminated by ultraviolet radiation.

(a) State the name of this phenomenon.

..... [1]

(b) For emission of electrons to occur, the frequency of the ultraviolet radiation must be at least  $8.8 \times 10^{14}$  Hz.

(i) Calculate the work function energy of magnesium.

work function energy = ..... J [2]

(ii) For ultraviolet radiation with a frequency of  $11 \times 10^{14}$  Hz, calculate the maximum speed of the emitted electrons.

maximum speed = .....  $\text{ms}^{-1}$  [3]

DO NOT WRITE IN THIS MARGIN





- (c) The frequency  $f$  of the ultraviolet radiation incident on the magnesium sheet is varied between  $8.0 \times 10^{14}$  Hz and  $11 \times 10^{14}$  Hz.

On Fig. 8.1, sketch the variation with  $f$  of the maximum kinetic energy  $E_{\text{MAX}}$  of the emitted electrons. Use the space below for any working that you need.

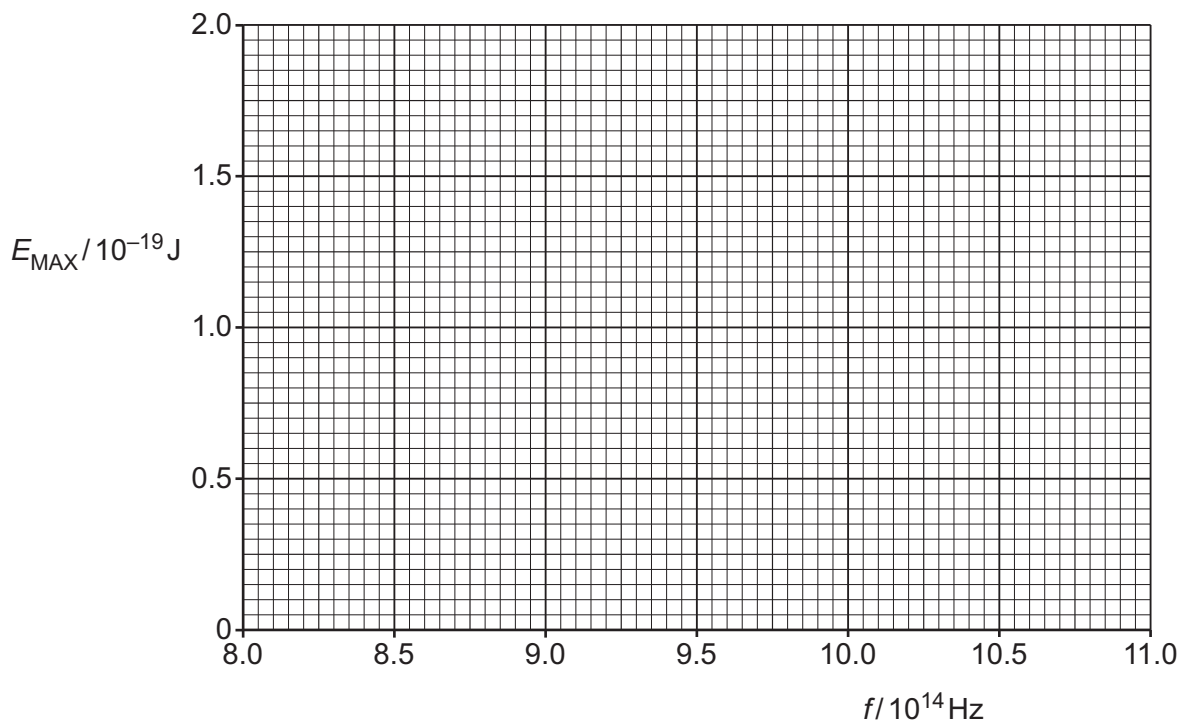


Fig. 8.1

[3]

[Total: 9]

DO NOT WRITE IN THIS MARGIN





BLANK PAGE

DO NOT WRITE IN THIS MARGIN

DO NOT WRITE IN THIS MARGIN

DO NOT WRITE IN THIS MARGIN

DO NOT WRITE IN THIS MARGIN

DO NOT WRITE IN THIS MARGIN





9 Fluorine-18 ( $^{18}_9\text{F}$ ) decays by beta-plus ( $\beta^+$ ) emission with a half-life of 110 minutes.

(a) (i) State the name of the beta-plus particle.

..... [1]

(ii) Show that the decay constant of fluorine-18 is  $1.05 \times 10^{-4} \text{ s}^{-1}$ .

[1]

(iii) Determine the activity of  $2.1 \times 10^{-12} \text{ kg}$  of fluorine-18.

activity = ..... Bq [3]

(b) A small sample of fluorine-18 injected into the body acts as a tracer for use in medical imaging.

(i) Describe how the interaction of a  $\beta^+$  particle with an electron in the body enables the formation of an image.

.....  
.....  
.....  
.....  
..... [3]

(ii) Suggest why 110 minutes is a suitable half-life for a nuclide used as a tracer in medical diagnosis.

.....  
.....  
..... [2]

[Total: 10]



DO NOT WRITE IN THIS MARGIN



10 (a) Explain how redshift leads to the idea that the Universe is expanding.

.....

.....

.....

.....

..... [3]

(b) Stars in a distant galaxy emit radiation. The total luminosity of the stars in the galaxy is  $1.90 \times 10^{36} \text{ W}$ .

The emission spectrum of the radiation contains a line X at a wavelength of 658 nm.

Radiation from the galaxy is observed on the Earth. The observed radiation has a radiant flux intensity of  $8.42 \times 10^{-16} \text{ W m}^{-2}$ . In the observed emission spectrum, line X is at a wavelength of 726 nm.

Determine:

(i) the distance  $d$  of the galaxy from the Earth

$d = \dots\dots\dots \text{ m}$  [2]

(ii) the speed  $v$  of the galaxy relative to the Earth.

$v = \dots\dots\dots \text{ ms}^{-1}$  [2]

DO NOT WRITE IN THIS MARGIN





(c) Observations of many galaxies, such as the one in (b), lead to many pairs of values of  $d$  and  $v$ . Plotting these values reveals a trend.

(i) On Fig. 10.1, sketch the variation of  $v$  with  $d$ .

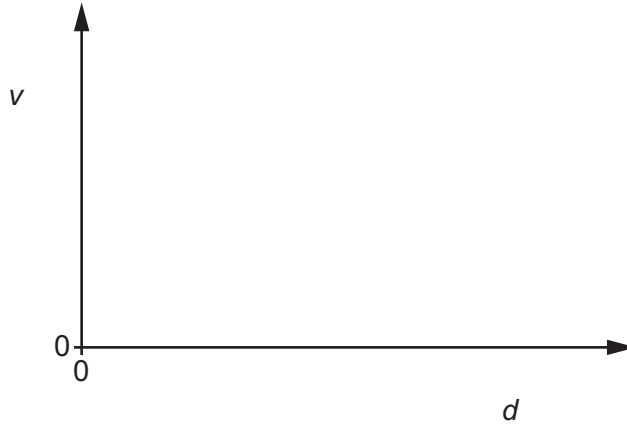


Fig. 10.1

[2]

(ii) State the name of the quantity represented by the gradient of the line in Fig. 10.1.

..... [1]

[Total: 10]

DO NOT WRITE IN THIS MARGIN





**BLANK PAGE**

DO NOT WRITE IN THIS MARGIN

DO NOT WRITE IN THIS MARGIN

DO NOT WRITE IN THIS MARGIN

DO NOT WRITE IN THIS MARGIN

DO NOT WRITE IN THIS MARGIN

---

Permission to reproduce items where third-party owned material protected by copyright is included has been sought and cleared where possible. Every reasonable effort has been made by the publisher (UCLES) to trace copyright holders, but if any items requiring clearance have unwittingly been included, the publisher will be pleased to make amends at the earliest possible opportunity.

To avoid the issue of disclosure of answer-related information to candidates, all copyright acknowledgements are reproduced online in the Cambridge Assessment International Education Copyright Acknowledgements Booklet. This is produced for each series of examinations and is freely available to download at [www.cambridgeinternational.org](http://www.cambridgeinternational.org) after the live examination series.

Cambridge Assessment International Education is part of Cambridge Assessment. Cambridge Assessment is the brand name of the University of Cambridge Local Examinations Syndicate (UCLES), which is a department of the University of Cambridge.

