



Cambridge O Level

CANDIDATE
NAME

CENTRE
NUMBER

--	--	--	--	--

CANDIDATE
NUMBER

--	--	--	--



ADDITIONAL MATHEMATICS

4037/21

Paper 2

May/June 2024

2 hours

You must answer on the question paper.

No additional materials are needed.

INSTRUCTIONS

- Answer **all** questions.
- Use a black or dark blue pen. You may use an HB pencil for any diagrams or graphs.
- Write your name, centre number and candidate number in the boxes at the top of the page.
- Write your answer to each question in the space provided.
- Do **not** use an erasable pen or correction fluid.
- Do **not** write on any bar codes.
- You should use a calculator where appropriate.
- You must show all necessary working clearly; no marks will be given for unsupported answers from a calculator.
- Give non-exact numerical answers correct to 3 significant figures, or 1 decimal place for angles in degrees, unless a different level of accuracy is specified in the question.

INFORMATION

- The total mark for this paper is 80.
- The number of marks for each question or part question is shown in brackets [].

This document has **16** pages. Any blank pages are indicated.

Mathematical Formulae**1. ALGEBRA***Quadratic Equation*

For the equation $ax^2 + bx + c = 0$,

$$x = \frac{-b \pm \sqrt{b^2 - 4ac}}{2a}$$

Binomial Theorem

$$(a + b)^n = a^n + \binom{n}{1}a^{n-1}b + \binom{n}{2}a^{n-2}b^2 + \dots + \binom{n}{r}a^{n-r}b^r + \dots + b^n$$

where n is a positive integer and $\binom{n}{r} = \frac{n!}{(n-r)!r!}$

Arithmetic series $u_n = a + (n-1)d$

$$S_n = \frac{1}{2}n(a + l) = \frac{1}{2}n\{2a + (n-1)d\}$$

Geometric series $u_n = ar^{n-1}$

$$S_n = \frac{a(1-r^n)}{1-r} \quad (r \neq 1)$$

$$S_\infty = \frac{a}{1-r} \quad (|r| < 1)$$

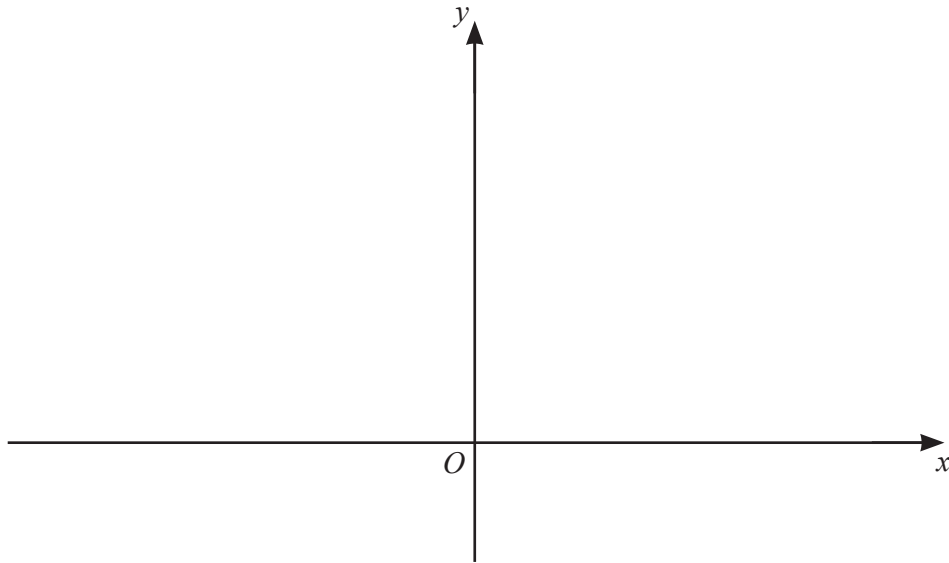
2. TRIGONOMETRY*Identities*

$$\begin{aligned} \sin^2 A + \cos^2 A &= 1 \\ \sec^2 A &= 1 + \tan^2 A \\ \operatorname{cosec}^2 A &= 1 + \cot^2 A \end{aligned}$$

Formulae for $\triangle ABC$

$$\begin{aligned} \frac{a}{\sin A} &= \frac{b}{\sin B} = \frac{c}{\sin C} \\ a^2 &= b^2 + c^2 - 2bc \cos A \\ \Delta &= \frac{1}{2}bc \sin A \end{aligned}$$

- 1 (a) On the axes, sketch the graph of $y = |4x - 6|$, showing the points where the graph meets the axes. [2]



- (b) Solve the equation $|4x - 6| = |2x|$. [3]

2 (a) Write $3 + 4x - 2x^2$ in the form $a + b(x + c)^2$, where a , b and c are integers. [3]

(b) Hence write down the range of the function $f(x) = 3 + 4x - 2x^2$, where $x \in \mathbb{R}$. [1]

3 Use algebra to show that the equation $5x(x - 3) = 5x - 26$ has no real solutions. [3]

4 DO NOT USE A CALCULATOR IN THIS QUESTION.

- (a) Find the exact distance between the two points where the curve $9(x-1)^2 + 4(y-3)^2 = 36$ cuts the y -axis. [4]

- (b) Find the coordinates of the points where the curve with equation $2x^2 + 83xy = x^3y - 20x$ intersects the curve with equation $y = \frac{1}{x}$. Give each of your answers in the form $a + b\sqrt{c}$, where a and b are rational and c is the smallest integer possible. [6]

5 There are 3 women, 2 men and 4 children in a choir.

(a) The choir stands in a single straight line.

(i) Find the number of possible arrangements if the first person and last person are both women. [2]

(ii) Find the number of possible arrangements if all the children stand next to each other. [2]

(b) Four of the choir are selected to sing in a group.

(i) Find the number of different selections if no man is chosen. [2]

(ii) Find the number of different selections if at least 2 women are chosen. [2]

- 6 Variables x and y are such that $y = \cos x \sin^2 x$. Use differentiation to find the approximate change in y as x increases from 3 to $3 + h$, where h is small. [5]

- 7 It is given that $y = mx^2 + \frac{x}{2} + n$, where m and n are non-zero constants. It is also given that $3\left(\frac{d^2y}{dx^2}\right) = \left(\frac{dy}{dx}\right)^2 - y$ for all values of x . Find the values of m and n . [4]

- 8 (a) In an arithmetic progression, the sum of the first 30 terms is -1065 .
The sum of the **next** 20 terms is -2210 .
Find the first term and the common difference.

[5]

- (b) A geometric progression is such that the first term is 4 and the sum of the first three terms is 7. Find the two possible values of the common ratio and find the sum to infinity for the convergent progression. [5]

9 The functions f and g are defined by

$$f(x) = \frac{3x^2}{4x-1} \quad \text{for } x < 0$$

$$g(x) = \frac{1}{x^2} \quad \text{for } x < 0.$$

(a) Explain why the function fg does **not** exist. [1]

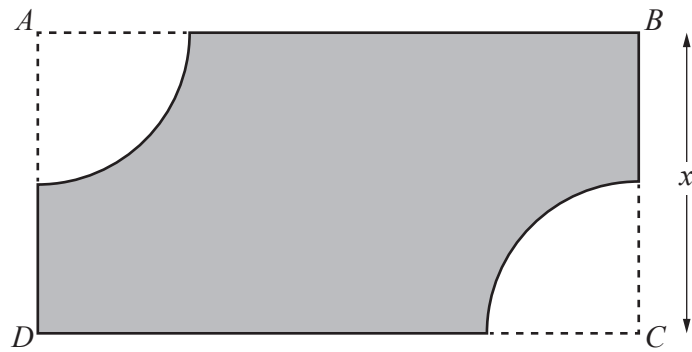
(b) Given that the function gf does exist, find and simplify an expression for $gf(x)$. [2]

(c) Show that $f^{-1}(x)$ can be written as $\frac{px - \sqrt{x(qx+r)}}{3}$ where p , q and r are integers. [4]

10 (a) Show that $(\tan x + \sec x)^2$ can be written as $\frac{1 + \sin x}{1 - \sin x}$. [4]

(b) Hence solve the equation $(\tan 3\theta + \sec 3\theta)^2 = 6$ for $0^\circ \leq \theta \leq 180^\circ$. [4]

11 In this question all lengths are in centimetres.



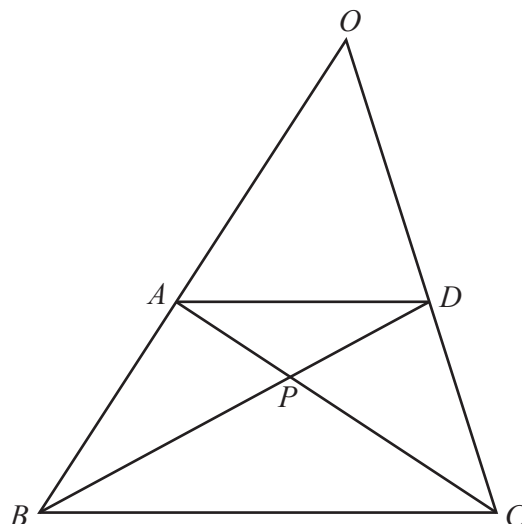
The diagram shows a rectangle $ABCD$ with $BC = x$.
The area of the rectangle is 400 cm^2 .

Two identical quarter-circles of radius $\frac{x}{2}$, with centres A and C , are removed from the rectangle to make the shaded shape.

Given that x can vary, find the value of x that gives the minimum value of the perimeter of the shaded shape and hence find this minimum value. [7]

Continuation of working space for Question 11.

12



The diagram shows a triangle OBC .
 $OA : OB = 4 : 7$ and $OD : OC = 4 : 7$.

$$\overrightarrow{OB} = \mathbf{b} \text{ and } \overrightarrow{OC} = \mathbf{c}$$

The point P is the point of intersection of AC and BD such that $\overrightarrow{AP} = \lambda \overrightarrow{AC}$ and $\overrightarrow{BP} = \mu \overrightarrow{BD}$ where λ and μ are scalars.

- (a) Find two expressions for \overrightarrow{OP} , each in terms of \mathbf{b} , \mathbf{c} and a scalar, and hence show that P divides both AC and DB in the ratio $4 : 7$. [7]

(b) The point Q is such that $\overrightarrow{OQ} = \frac{2}{7}\mathbf{b} + \frac{2}{7}\mathbf{c}$.

Use a vector method to show that O , Q and P are collinear. Justify your answer.

[2]

BLANK PAGE

Permission to reproduce items where third-party owned material protected by copyright is included has been sought and cleared where possible. Every reasonable effort has been made by the publisher (UCLES) to trace copyright holders, but if any items requiring clearance have unwittingly been included, the publisher will be pleased to make amends at the earliest possible opportunity.

To avoid the issue of disclosure of answer-related information to candidates, all copyright acknowledgements are reproduced online in the Cambridge Assessment International Education Copyright Acknowledgements Booklet. This is produced for each series of examinations and is freely available to download at www.cambridgeinternational.org after the live examination series.

Cambridge Assessment International Education is part of Cambridge Assessment. Cambridge Assessment is the brand name of the University of Cambridge Local Examinations Syndicate (UCLES), which is a department of the University of Cambridge.