



# Cambridge O Level

CANDIDATE  
NAME

--

CENTRE  
NUMBER

--	--	--	--	--

CANDIDATE  
NUMBER

--	--	--	--



**MATHEMATICS (SYLLABUS D)**

**4024/21**

Paper 2

**October/November 2023**

**2 hours 30 minutes**

You must answer on the question paper.

You will need: Geometrical instruments

## INSTRUCTIONS

- Answer **all** questions.
- Use a black or dark blue pen. You may use an HB pencil for any diagrams or graphs.
- Write your name, centre number and candidate number in the boxes at the top of the page.
- Write your answer to each question in the space provided.
- Do **not** use an erasable pen or correction fluid.
- Do **not** write on any bar codes.
- You should use a calculator where appropriate.
- You may use tracing paper.
- You must show all necessary working clearly.
- Give non-exact numerical answers correct to 3 significant figures, or 1 decimal place for angles in degrees, unless a different level of accuracy is specified in the question.
- For  $\pi$ , use either your calculator value or 3.142.

## INFORMATION

- The total mark for this paper is 100.
- The number of marks for each question or part question is shown in brackets [ ].

This document has **20** pages. Any blank pages are indicated.

- 1 (a) The population of a town is 36 400.  
23% of the population are aged 18 and under.

Work out the number of people in the town aged over 18.

..... [2]

- (b) In a village, the ratio of the ages of the population is under 18 : 18 to 60 : over 60 = 4 : 11 : 5 .  
There are 890 people aged over 60.

Work out the total number of people in the village aged 60 and under.

..... [2]

- (c) In 2015, the population of a city was 702 800.

- (i) In 2020, the population was 678 202.

Calculate the percentage decrease in the population from 2015 to 2020.

..... % [2]

- (ii) The population of the city increased by 12% between 1980 and 2015.

Calculate the population of the city in 1980.

..... [2]

(d) The table shows the population and area of some countries.

Country	Population	Area in km <sup>2</sup>
Bangladesh	$1.63 \times 10^8$	148 000
Bahrain	$1.54 \times 10^6$	760
Maldives	$3.92 \times 10^5$	298
Lebanon	$5.30 \times 10^6$	10 400

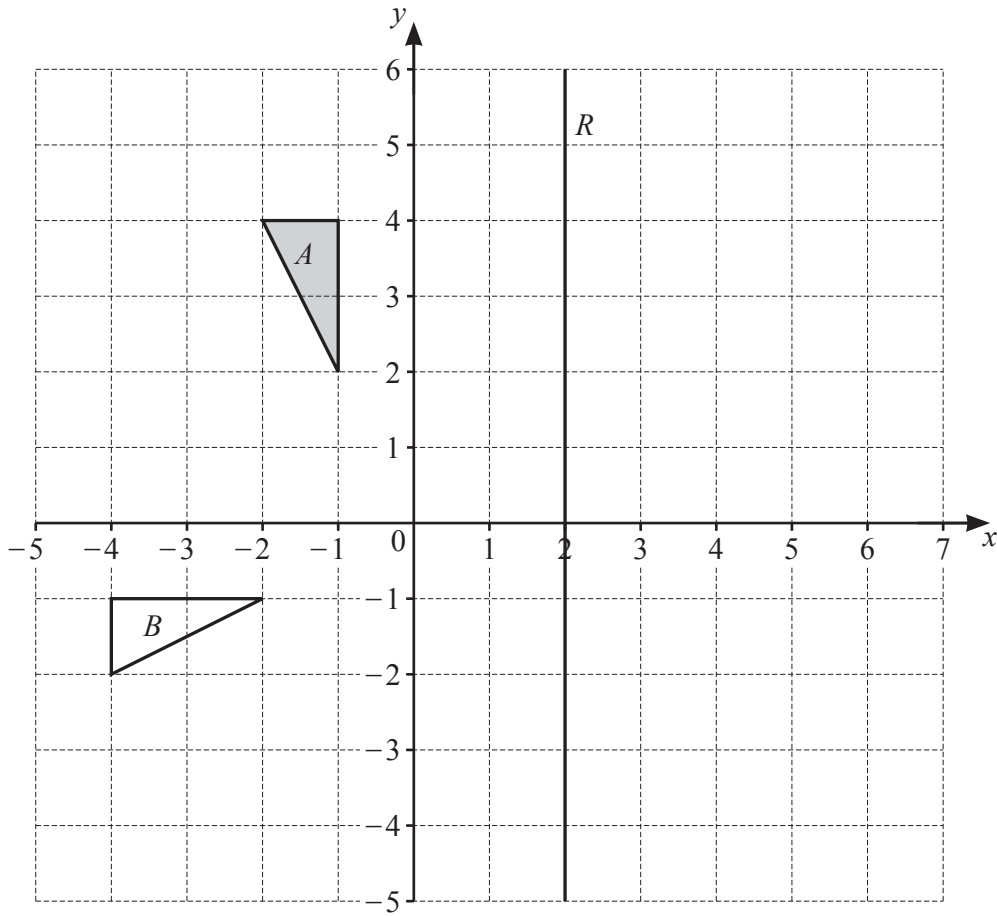
- (i) Work out how many more people live in Bahrain than in Maldives.  
Give your answer in standard form.

..... [1]

- (ii) The population density of a country is the number of people per square kilometre.

Which of these countries has the highest population density?  
Show how you decide.

..... [3]



Triangle *A*, triangle *B* and line *R* are drawn on the grid.

(a) (i) Write down the equation of line *R*.

..... [1]

(ii) Draw the image of triangle *A* after a reflection in line *R*.

[1]

(b) Describe fully the **single** transformation that maps triangle *A* onto triangle *B*.

.....

..... [3]

3 (a) The equation of line  $L$  is  $4y = x - 5$ .

(i) Find the gradient of line  $L$ .

..... [1]

(ii) Find the coordinates of the point where line  $L$  crosses the  $y$ -axis.

( ..... , ..... ) [1]

(b)  $A$  is the point  $(4, 5)$  and  $B$  is the point  $(-2, 8)$ .

(i) Find the length of line  $AB$ .

..... [2]

(ii) Find the equation of line  $AB$ .  
Give your answer in the form  $y = mx + c$ .

$y =$  ..... [3]

4 (a) These are the first five terms of a sequence.

5 12 19 26 33

(i) Find the next term of the sequence.

..... [1]

(ii) Find an expression for the  $n$ th term of the sequence.

..... [2]

(iii)  $T_k$  and  $T_{k+1}$  are consecutive terms of the sequence.  
The sum of these two terms is 703.

Find the value of  $k$ .

$k =$  ..... [3]

- (b) An expression for the  $n$ th term of a different sequence is  $n^2 + an + b$ .  
The 1st term of the sequence is 3.  
The 3rd term of the sequence is 19.

Find the 6th term of the sequence.

..... [5]

- 5 (a) This is part of a bus timetable.

Town square	06 30	06 50	07 10	07 35	07 45
Railway station	06 48	07 08	07 28	07 53	08 03
Business park	07 16	07 36	07 56	08 21	08 31
Airport	07 35	07 55	08 15	08 40	08 50

- (i) Work out how long the bus takes to get from the town square to the business park.

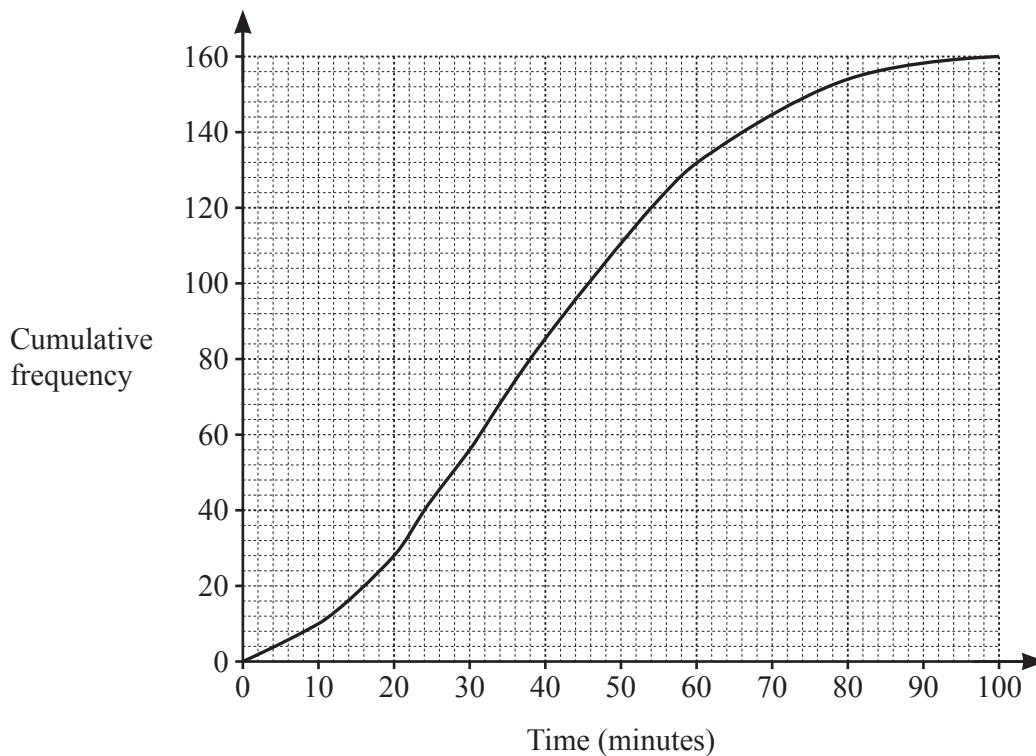
..... minutes [1]

- (ii) Tom arrives at the railway station at 07 12.  
He gets on the next bus to the airport.

Find the time he arrives at the airport.

..... [1]

- (b) 160 workers at the business park are asked the time taken, in minutes, for their journey to work.  
The results are shown in the cumulative frequency diagram.





Use the diagram to estimate

- (i) the number of workers whose journey took less than 30 minutes

..... [1]

- (ii) the interquartile range

..... minutes [2]

- (iii) the percentage of workers whose journey took longer than 1 hour.

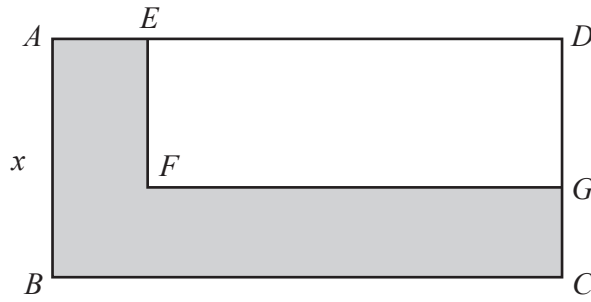
..... % [3]

- (c) Chen's journey to work is a distance of 37 km, correct to the nearest kilometre.  
His journey on Monday takes 43 minutes, correct to the nearest minute.

Calculate the lower bound of the average speed for this journey.  
Give your answer in kilometres per hour.

..... km/h [3]

6

NOT TO  
SCALE

$ABCD$  is a rectangle with area  $30 \text{ cm}^2$ .  
 $AB = x \text{ cm}$ .

Rectangle  $DEFG$  is removed from the corner of rectangle  $ABCD$ .  
 $AE = CG = 2 \text{ cm}$ .

(a) Write down an expression for  $BC$  in terms of  $x$ .

..... [1]

(b) Show that the shaded area,  $y \text{ cm}^2$ , is given by

$$y = 2x + \frac{60}{x} - 4.$$

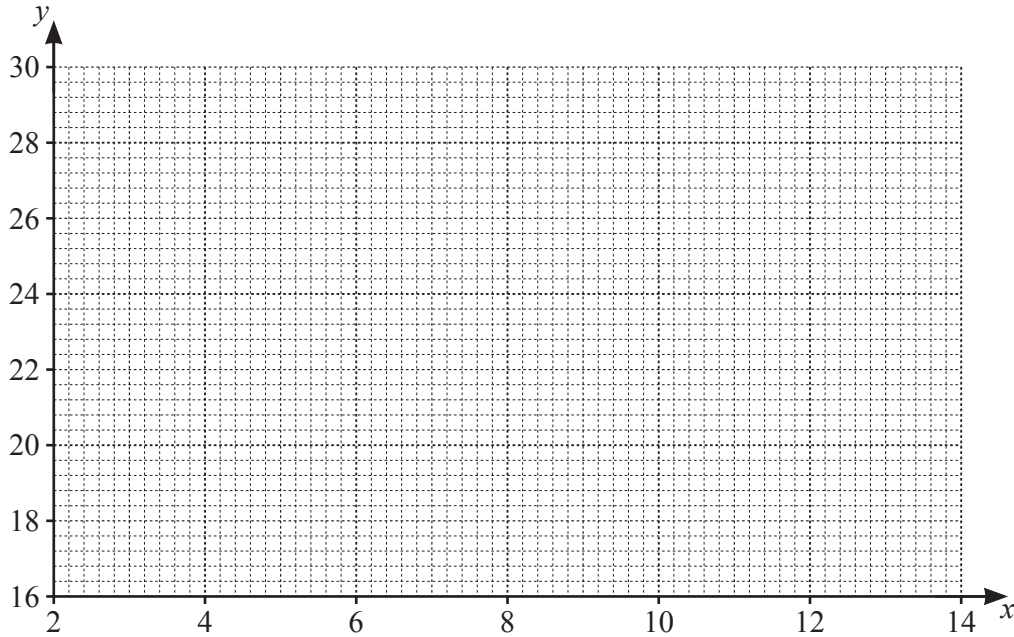
[3]

- (c) Complete the table for  $y = 2x + \frac{60}{x} - 4$ .  
Write your answer correct to 1 decimal place.

$x$	2	3	4	6	8	10	12	14
$y$	30	22	19	18	19.5	22	25	

[1]

- (d) Draw the graph of  $y = 2x + \frac{60}{x} - 4$  for  $2 \leq x \leq 14$ .



[3]

- (e) The shaded area is  $24 \text{ cm}^2$ .  
The length of  $AB$  is less than the length of  $BC$ .

Use your graph to find the dimensions of rectangle  $ABCD$ .

..... cm by ..... cm [2]

7 (a) Simplify.

$$7a - 4b - 2a + b$$

..... [2]

(b) Expand and simplify.

$$3(2x - 3) + 5(x + 2)$$

..... [2]

(c) Solve.

$$6x^2 - 2x - 9 = 0$$

Show all your working and give your answers correct to 2 decimal places.

$x = \dots\dots\dots$  or  $x = \dots\dots\dots$  [3]

(d) Write as a single fraction in its simplest form.

(i)  $\frac{x}{4} \div \frac{2}{y}$

..... [1]

(ii)  $\frac{3}{x-5} - \frac{7}{2x+1}$

..... [3]

- 8 (a) A group of 40 children are each asked how many books they read last month. The table shows the results.

Number of books	0	1	2	3	4	5
Frequency	7	11	9	5	6	2

- (i) Write down the mode.

..... [1]

- (ii) Find the median.

..... [1]

- (iii) Calculate the mean.

..... [2]

- (iv) One of the 40 children is chosen at random.

Find the probability that this child read 4 or more books.  
Give your answer as a fraction in its simplest form.

..... [2]

- (b) There are 10 books on a shelf.  
7 of the books are fiction and 3 are non-fiction.

- (i) Sanjay takes a book from the shelf at random, looks at it and replaces it.  
He then takes another book from the shelf at random, looks at it and replaces it.

Find the probability that one book is fiction and the other book is non-fiction.

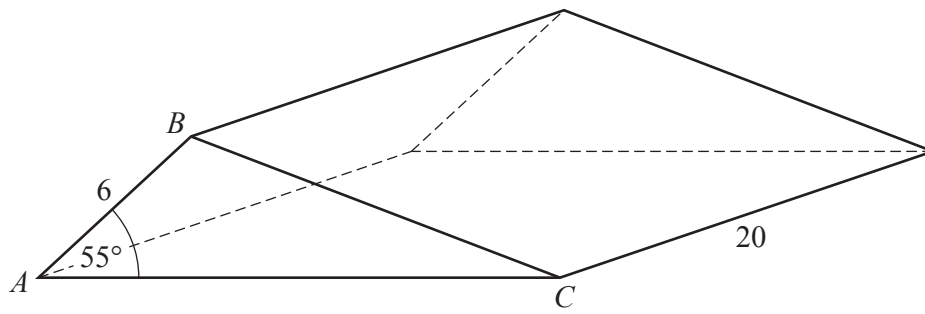
..... [2]

- (ii) Mona takes 3 books from the 10 books on the shelf at random without replacement.

Find the probability that only one of the books she takes is fiction.

..... [3]

9 (a)



The diagram shows a triangular prism.  
 $AB = 6$  cm, angle  $BAC = 55^\circ$  and the length of the prism is 20 cm.  
 The area of triangle  $ABC$  is  $34.4 \text{ cm}^2$ .

- (i) Calculate the volume of the prism.  
 Give the units of your answer.

..... [2]

- (ii) Show that  $AC = 14.0$  cm, correct to 3 significant figures.

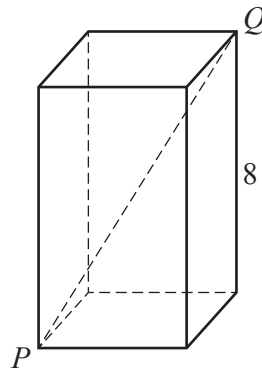
[3]

- (iii) Calculate the surface area of the prism.

.....  $\text{cm}^2$  [5]



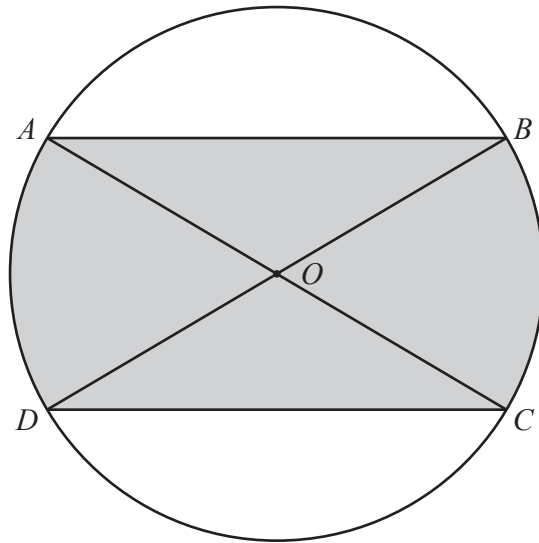
(b)



The diagram shows a cuboid with a square base.  
The height of the cuboid is 8 cm.  
The volume of the cuboid is  $98 \text{ cm}^3$ .

Calculate  $PQ$ .

..... cm [4]



NOT TO  
SCALE

The diagram shows a circle, centre  $O$ , with diameters  $AC$  and  $BD$ .

- (a) Show that triangle  $OAB$  is congruent to triangle  $ODC$ .  
Give a reason for each statement you make.

.....

.....

.....

.....

[3]

- (b) The diameter of the circle is 10 cm and  $AB = 9$  cm.

Calculate the difference between the circumference of the circle and the perimeter of the shaded shape.

..... cm [5]

**BLANK PAGE**

---

Permission to reproduce items where third-party owned material protected by copyright is included has been sought and cleared where possible. Every reasonable effort has been made by the publisher (UCLES) to trace copyright holders, but if any items requiring clearance have unwittingly been included, the publisher will be pleased to make amends at the earliest possible opportunity.

To avoid the issue of disclosure of answer-related information to candidates, all copyright acknowledgements are reproduced online in the Cambridge Assessment International Education Copyright Acknowledgements Booklet. This is produced for each series of examinations and is freely available to download at [www.cambridgeinternational.org](http://www.cambridgeinternational.org) after the live examination series.

Cambridge Assessment International Education is part of Cambridge Assessment. Cambridge Assessment is the brand name of the University of Cambridge Local Examinations Syndicate (UCLES), which is a department of the University of Cambridge.