



# Cambridge IGCSE™

CANDIDATE  
NAME

--

CENTRE  
NUMBER

--	--	--	--	--

CANDIDATE  
NUMBER

--	--	--	--



**ADDITIONAL MATHEMATICS**

**0606/11**

Paper 1

**May/June 2021**

**2 hours**

You must answer on the question paper.

No additional materials are needed.

## INSTRUCTIONS

- Answer **all** questions.
- Use a black or dark blue pen. You may use an HB pencil for any diagrams or graphs.
- Write your name, centre number and candidate number in the boxes at the top of the page.
- Write your answer to each question in the space provided.
- Do **not** use an erasable pen or correction fluid.
- Do **not** write on any bar codes.
- You should use a calculator where appropriate.
- You must show all necessary working clearly; no marks will be given for unsupported answers from a calculator.
- Give non-exact numerical answers correct to 3 significant figures, or 1 decimal place for angles in degrees, unless a different level of accuracy is specified in the question.

## INFORMATION

- The total mark for this paper is 80.
- The number of marks for each question or part question is shown in brackets [ ].

This document has **16** pages. Any blank pages are indicated.

**Mathematical Formulae****1. ALGEBRA***Quadratic Equation*

For the equation  $ax^2 + bx + c = 0$ ,

$$x = \frac{-b \pm \sqrt{b^2 - 4ac}}{2a}$$

*Binomial Theorem*

$$(a + b)^n = a^n + \binom{n}{1}a^{n-1}b + \binom{n}{2}a^{n-2}b^2 + \dots + \binom{n}{r}a^{n-r}b^r + \dots + b^n$$

where  $n$  is a positive integer and  $\binom{n}{r} = \frac{n!}{(n-r)!r!}$

*Arithmetic series*      $u_n = a + (n-1)d$

$$S_n = \frac{1}{2}n(a + l) = \frac{1}{2}n\{2a + (n-1)d\}$$

*Geometric series*      $u_n = ar^{n-1}$

$$S_n = \frac{a(1-r^n)}{1-r} \quad (r \neq 1)$$

$$S_\infty = \frac{a}{1-r} \quad (|r| < 1)$$

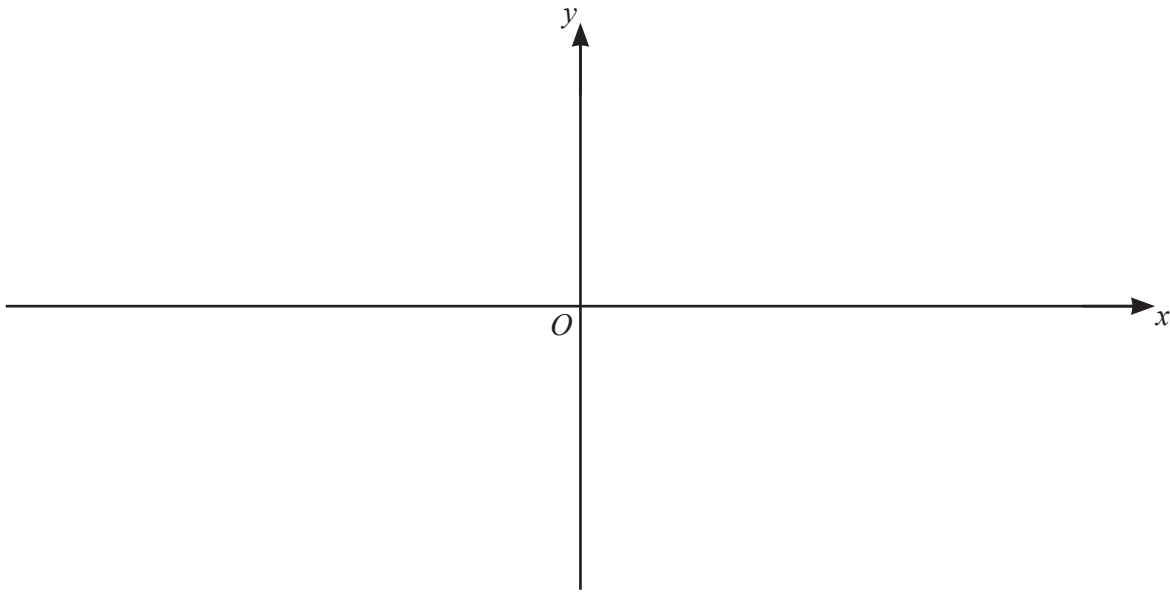
**2. TRIGONOMETRY***Identities*

$$\begin{aligned} \sin^2 A + \cos^2 A &= 1 \\ \sec^2 A &= 1 + \tan^2 A \\ \operatorname{cosec}^2 A &= 1 + \cot^2 A \end{aligned}$$

*Formulae for  $\triangle ABC$* 

$$\begin{aligned} \frac{a}{\sin A} &= \frac{b}{\sin B} = \frac{c}{\sin C} \\ a^2 &= b^2 + c^2 - 2bc \cos A \\ \Delta &= \frac{1}{2}bc \sin A \end{aligned}$$

- 1 (a) On the axes, sketch the graph of  $y = 5(x+1)(3x-2)(x-2)$ , stating the intercepts with the coordinate axes. [3]



- (b) Hence find the values of  $x$  for which  $5(x+1)(3x-2)(x-2) > 0$ . [2]

- 2 Find  $\int_3^5 \left( \frac{1}{x-1} - \frac{1}{(x-1)^2} \right) dx$ , giving your answer in the form  $a + \ln b$ , where  $a$  and  $b$  are rational numbers. [5]

3 The polynomial  $p(x) = ax^3 - 9x^2 + bx - 6$ , where  $a$  and  $b$  are constants, has a factor of  $x - 2$ . The polynomial has a remainder of 66 when divided by  $x - 3$ .

(a) Find the value of  $a$  and of  $b$ . [4]

(b) Using your values of  $a$  and  $b$ , show that  $p(x) = (x - 2)q(x)$ , where  $q(x)$  is a quadratic factor to be found. [2]

(c) Hence show that the equation  $p(x) = 0$  has only one real solution. [2]

- 4 The first 3 terms in the expansion of  $(a+x)^3\left(1-\frac{x}{3}\right)^5$ , in ascending powers of  $x$ , can be written in the form  $27+bx+cx^2$ , where  $a$ ,  $b$  and  $c$  are integers. Find the values of  $a$ ,  $b$  and  $c$ . [8]

5 The functions  $f$  and  $g$  are defined as follows.

$$f(x) = x^2 + 4x \quad \text{for } x \in \mathbb{R}$$

$$g(x) = 1 + e^{2x} \quad \text{for } x \in \mathbb{R}$$

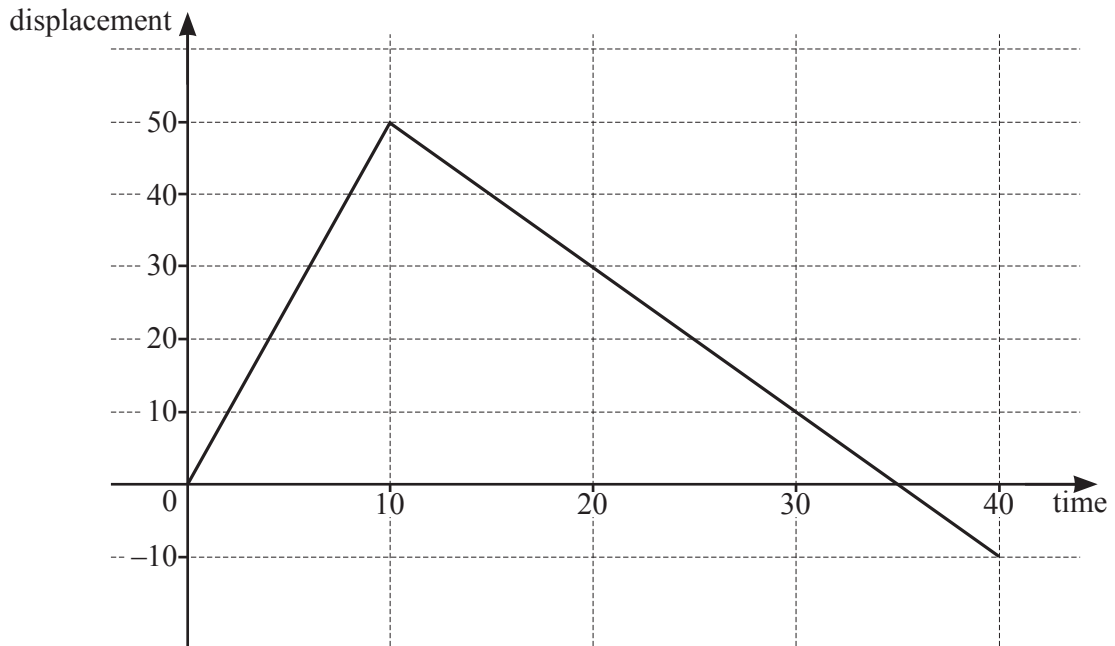
(a) Find the range of  $f$ . [2]

(b) Write down the range of  $g$ . [1]

(c) Find the exact solution of the equation  $fg(x) = 21$ , giving your answer as a single logarithm. [4]


- 6 (a) (i) Find how many different 5-digit numbers can be formed using the digits 1, 3, 5, 6, 8 and 9. No digit may be used more than once in any 5-digit number. [1]
- (ii) How many of these 5-digit numbers are odd? [1]
- (iii) How many of these 5-digit numbers are odd and greater than 60 000? [3]
- (b) Given that  $45 \times {}^n C_4 = (n+1) \times {}^{n+1} C_5$ , find the value of  $n$ . [4]

- 7 (a) In this question, all lengths are in metres and time,  $t$ , is in seconds.



The diagram shows the displacement–time graph for a runner, for  $0 \leq t \leq 40$ .

- (i) Find the distance the runner has travelled when  $t = 40$ . [1]
- (ii) On the axes, draw the corresponding velocity–time graph for the runner, for  $0 \leq t \leq 40$ . [2]





(b) A particle,  $P$ , moves in a straight line such that its displacement from a fixed point at time  $t$  is  $s$ .

The acceleration of  $P$  is given by  $(2t+4)^{-\frac{1}{2}}$ , for  $t > 0$ .

(i) Given that  $P$  has a velocity of 9 when  $t = 6$ , find the velocity of  $P$  at time  $t$ . [3]

(ii) Given that  $s = \frac{1}{3}$  when  $t = 6$ , find the displacement of  $P$  at time  $t$ . [3]

**8 DO NOT USE A CALCULATOR IN THIS QUESTION.**

A curve has equation  $y = (2 - \sqrt{3})x^2 + x - 1$ . The  $x$ -coordinate of a point  $A$  on the curve is  $\frac{\sqrt{3} + 1}{2 - \sqrt{3}}$ .

- (a) Show that the coordinates of  $A$  can be written in the form  $(p + q\sqrt{3}, r + s\sqrt{3})$ , where  $p$ ,  $q$ ,  $r$  and  $s$  are integers. [5]

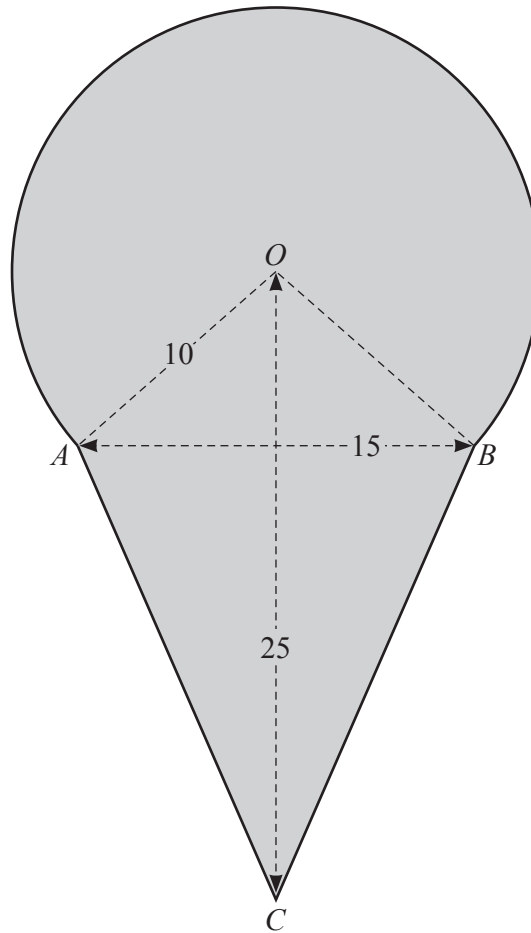
- (b) Find the  $x$ -coordinate of the stationary point on the curve, giving your answer in the form  $a + b\sqrt{3}$ , where  $a$  and  $b$  are rational numbers. [3]

9 (a) (i) Write  $6xy + 3y + 4x + 2$  in the form  $(ax + b)(cy + d)$ , where  $a$ ,  $b$ ,  $c$  and  $d$  are positive integers. [1]

(ii) Hence solve the equation  $6 \sin \theta \cos \theta + 3 \cos \theta + 4 \sin \theta + 2 = 0$  for  $0^\circ < \theta < 360^\circ$ . [4]

- (b) Solve the equation  $\frac{1}{2}\sec\left(2\phi + \frac{\pi}{4}\right) = \frac{1}{\sqrt{3}}$  for  $-\pi < \phi < \pi$ , where  $\phi$  is in radians. Give your answers in terms of  $\pi$ . [5]

10 In this question all lengths are in centimetres.



The diagram shows a shaded shape. The arc  $AB$  is the major arc of a circle, centre  $O$ , radius 10. The line  $AB$  is of length 15, the line  $OC$  is of length 25 and the lengths of  $AC$  and  $BC$  are equal.

(a) Show that the angle  $AOB$  is 1.70 radians correct to 2 decimal places. [2]

(b) Find the perimeter of the shaded shape. [4]

(c) Find the area of the shaded shape.

[5]

**BLANK PAGE**

---

Permission to reproduce items where third-party owned material protected by copyright is included has been sought and cleared where possible. Every reasonable effort has been made by the publisher (UCLES) to trace copyright holders, but if any items requiring clearance have unwittingly been included, the publisher will be pleased to make amends at the earliest possible opportunity.

To avoid the issue of disclosure of answer-related information to candidates, all copyright acknowledgements are reproduced online in the Cambridge Assessment International Education Copyright Acknowledgements Booklet. This is produced for each series of examinations and is freely available to download at [www.cambridgeinternational.org](http://www.cambridgeinternational.org) after the live examination series.

Cambridge Assessment International Education is part of the Cambridge Assessment Group. Cambridge Assessment is the brand name of the University of Cambridge Local Examinations Syndicate (UCLES), which itself is a department of the University of Cambridge.